

HALF YEARLY EXAMINATION - 2024

MATHS
(RAINBOW)

Max. Marks: 100

Std - LKG

Time: 2 Hrs

Name of the Student:	Written	Oral	Total
Name of the School:			

I. Write the numbers from 1 to 20: 20

1									
11									

II. Count and write in the box: 5 x 2 = 10




-




-



-


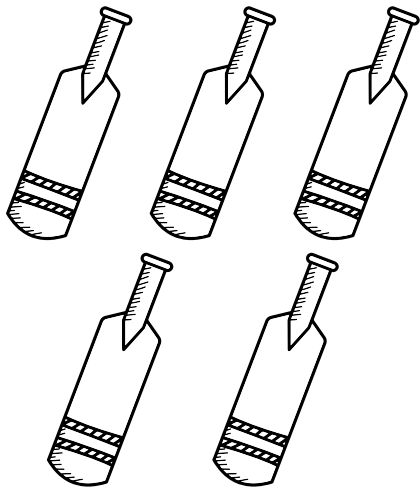


-

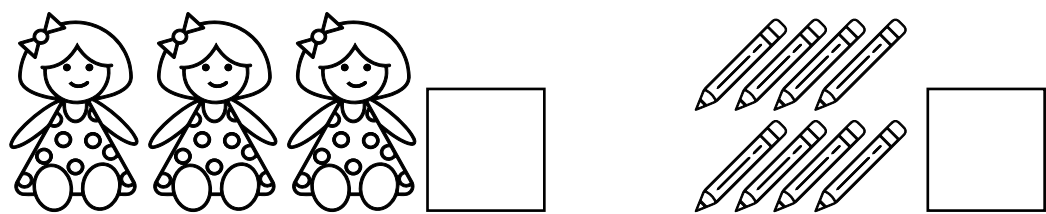


-

III. a) Tick (✓) the more and cross (✗) the less: 2 x 2½ = 5



b) Colour one bird (brown), colour a few flowers pink:

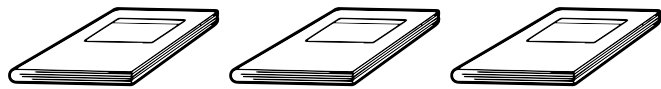


IV. Count and match the correct number:

$5 \times 2 = 10$



6



9



3









2



8

V. Match to the shapes:

$4 \times 1\frac{1}{4} = 5$



VI. Match the following:


5 x 2 = 10



6



9



5



2



10

VII. Oral:

- | | |
|-----------------------------------|-----------|
| 1. Tell the shapes name. | 15 |
| 2. Tell the numbers from 1 to 20. | 10 |
| 3. Count & tell the numbers. | 15 |

