

HALF YEARLY EXAMINATION - 2024

MATHS  
(RAINBOW)

Max. Marks: 100




Std - UKG


Time: 2 Hrs

Name of the Student: <hr/>	Written	Oral	Total
Name of the School: <hr/>			


I. Write the numbers 1 to 100: 20


II. Tick ☒ the thick object and cross ☒ the thin object: 5 x 1 = 5

☐☐☐



III. Colour the heavy object blue and the heavier object yellow:  
 $5 \times 1 = 5$




IV. Write the numbers that comes before, between and after:  
 $10 \times 1 = 10$

6	7	
	55	56
	23	24
50		52
98		100
63	64	
5		7
	11	12

66		68
98	99	

V. Match full and empty things:

5 x 1 = 5



**VI. Fill in the box choosing the right number (>, =, <):**      **5 x 1 = 5**

1.

6

8

2

6

>

2.

9

5

1

5

=

3.

38

24

19

24

<

4.

44

28

12

28

>

5.

15

12

19

12

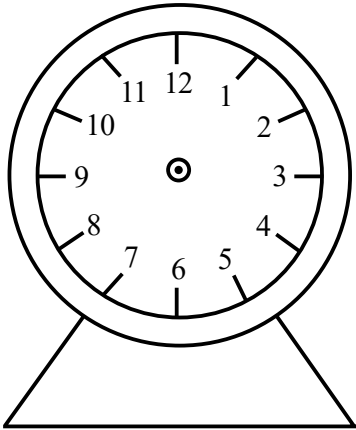
<

**VII. Count by five. Write the missing numbers:**      **5 x 1 = 5**

5		15		25	30		40		50
	60			75		85		95	

**VIII. Draw the hands of the clock to show the right time as given below:**      **1 x 5 = 5**

3'o Clock



**IX. Oral:** **40**

1. Spell the numbers name fifty one to hundred.
2. Show the picture and tell the time.
3. Tell the number 52 to 100.
4. Identify the hard and soft objects.