

THIRD MID TERM EXAMINATION

MATHS  
(RAINBOW)

Max. Marks: 50


Std - LKG


Time: 2 Hrs


Name of the Student:	Written	Oral	Total
Name of the School:			

I. Write the numbers from 1 to 50: 15



II. Count & write the numbers: 5 x 1 = 5

1. 


2. 

3. 

4.



5.



**III. Write the numbers what comes next:**

$$5 \times 2 = 10$$

25 \_\_\_\_\_

12 \_\_\_\_\_

49 \_\_\_\_\_

36 \_\_\_\_\_

28 \_\_\_\_\_

**IV. Oral:**

$$2 \times 10 = 20$$

1. Tell the numbers from 1 to 50
2. Skip counting by 10.