

FORMATIVE ASSESSMENT – THIRD MID TERM

MATHEMATICS

Max. Marks: 50

Std - II

Time: 2 Hrs

Name of the School:	Name of the Student:
Place:	Roll No.:

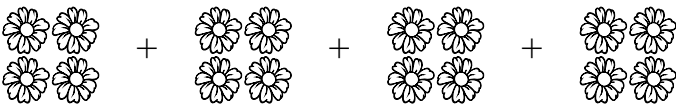
I. Write the repeated addition:

5 x 1 = 5

1.  + + + + +


There are 5 groups of 2 balls

Repeated addition fact _____.

2.  + + + +

There are 4 groups of 4 flowers each

Repeated addition fact _____.

3.  + + + + +

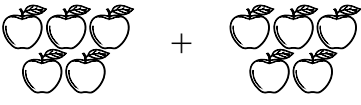
There are 3 groups of 5 match sticks each

Repeated addition fact _____.

4.  + +

There are 3 groups of 5 stars

Repeated addition fact _____.

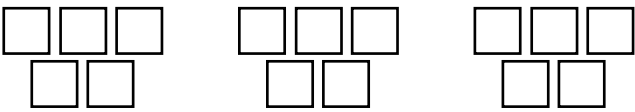
5.  +

There are 2 groups of 5 apples each

Repeated addition fact _____.

II. Write the addition face and multiplication fact:

2 x 2 = 4

6. 

Addition Fact _____

Multiplication Fact _____



Addition Fact _____

Multiplication Fact _____

III. Add using doubles:

$4 \times 1 = 4$

8. $7 + 5 =$ _____

9. $8 + 6 =$ _____

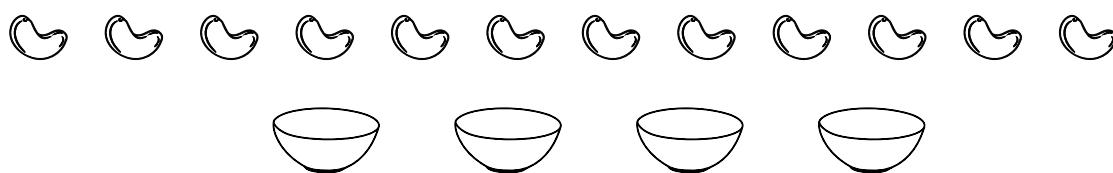
10. $9 + 2 =$ _____

11. $5 + 5 =$ _____

IV. Write the repeated subtraction fact:

$2 \times 3 = 6$

12. Look at the pictures below. Divide the objects equally in the given bowls and write the equal sharing by repeated subtraction.



Equal sharing of _____

Number of bowls _____

Repeated subtraction _____

13. Divide the stars equally in the baskets and write the repeated subtraction facts.



Equal sharing of _____

Number of baskets _____

Repeated subtraction _____

V. Subtract using doubles:

$6 \times 1 = 6$

14. $9 - 5 =$ _____

15. $6 - 2 =$ _____

16. $8 - 4 =$ _____

17. $2 - 0 =$ _____

18. $10 - 1 =$ _____

19. $5 - 5 =$ _____


VI. Which will have more capacity:

5 x 1 = 5

- | | | |
|--------------------|-----------------|---------------|
| 20. a) Spoon | b) Tumbler | c) Jug |
| 21. a) Cough syrup | b) Water bottle | c) Water tank |
| 22. a) Litre | b) 350 ml | c) 500 ml |
| 23. a) Cycle | b) Car | c) Lorry |
| 24. a) Sea | b) River | c) Pond |

VII. Fill in the boxes write “HEAVIER THAN” “LIGHTER THAN” or equal:

5 x 1 = 5



The apple is _____ than the orange.


The orange is _____ than the apple.




The capsicum is _____ than the coconut.



The cauliflower is _____ than the peas.



Both the pans are _____



Both pans are _____

VIII. Word problem:

3 x 2 = 6


30. A Spider has 8 legs. How many legs do 4 spiders have.

31. Jessi has 24 cookies. If she shares the cookies equally among 6 friends, how many cookies will each friend get.
32. A florist has 81 roses. If she puts 9 flowers into one basket, how many baskets will she need.

IX. Circle less capacity:

$4 \times 1 = 4$

33.



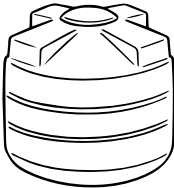
34.





35.




36.











X. Arrange the following in ascending order:

$2 \times 2 \frac{1}{2} = 5$

37.



28.

