

THIRD MID TERM EXAMINATION

MATHS
(RAINBOW)

Max. Marks: 50

Std - UKG

Time: 2 Hrs

| | | | |
|----------------------|---------|------|-------|
| Name of the Student: | Written | Oral | Total |
| Name of the School: | | | |







I. Write the numbers 101 to 150: 10

| | | | | | | | | | |
|--|--|--|--|--|--|--|--|--|--|
| | | | | | | | | | |
| | | | | | | | | | |
| | | | | | | | | | |
| | | | | | | | | | |
| | | | | | | | | | |

II. Write before, between and after number: 5 x 1 = 5

| | | |
|-----|-----|-----|
| 104 | | 106 |
| | 110 | 111 |
| 131 | 132 | |
| 141 | | 143 |
| | 114 | 115 |

III. Count and write: 5 x 2 = 10



1.   +    


2

+

4

=


2.  +  =

3.  +  =


4.  +  =

5.  +  =

6.  +  =

7.  +  =


8.  +  =


9.  +  =


IV. Match the correct numbers:


$5 \times 1 = 5$

1.  =

2.  =

3.  =

4.  =

5.  =

V. Oral:

$2 \times 10 = 20$

1. Tell the numbers name 101 to 150.

2. Show the picture and count.