

SUMMATIVE ASSESSMENT - THIRD TERM

COMPUTER SCIENCE

Max. Marks: 50

Std - II

Time: 2 Hr

Name of the School:	Name of the Student:
Place:	Roll No.:




I. Choose the correct answer:

5 x 1 = 5

1. \_\_\_\_\_ is used to create drawings on a drawing area.
- a) Notepad                      b) Wordpad                      c) Paint                      d) Calculator
2. The \_\_\_\_\_ tool is used to draw thick lines and paint free hand.
- a) Airbrush                      b) Brush                      c) Line                      d) Curve
3. \_\_\_\_\_ is a network of computers.
- a) Chrome                      b) Google                      c) Internet                      d) Printer
4. \_\_\_\_\_ is used to access the internet.
- a) Computer                      b) Windows                      c) Web browser                      d) Network
5. The airbrush tool is used for \_\_\_\_\_ painting.
- a) thick                      b) spray                      c) freehand                      d) oil

II. Match the following:

5 x 1 = 5

6. iPhone                      -                      Ctrl + S
7. Financial Transaction                      -                      Ctrl + P
8.                       -                      
9. Print your work                      -                      Text tool
10. Saving your work                      -                      

III. Fill in the blanks with suitable words:

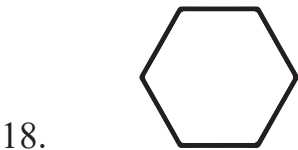
1 x 5 = 5

11. \_\_\_\_\_ is a search engine.
12. \_\_\_\_\_ is an operating system.

13. Android is a mobile operating system owned by \_\_\_\_\_.
14. Android wear is designed for watches known as \_\_\_\_\_.
15. \_\_\_\_\_ is the fastest type of memory in the computer.

**IV. Find out my name:**

**5 x 1 = 5**



**V. Answer the following:**

**5 x 2 = 10**

21. Name any two web browsers.

\_\_\_\_\_

\_\_\_\_\_

22. Which devices can be connected to the internet?

\_\_\_\_\_

\_\_\_\_\_

23. What is the use of pick colour tool?

\_\_\_\_\_

\_\_\_\_\_

24. How will you save your work?

\_\_\_\_\_

\_\_\_\_\_

25. What is the use of a magnifier tool?

\_\_\_\_\_

\_\_\_\_\_

**VI. Missing letter:**

**5 x 1 = 5**

26. P \_ \_ l \_ \_ \_ o n
27. C \_ \_ m m \_ \_ \_ i c \_ \_ t \_ \_ o n
28. M \_ \_ d \_ \_ m
29. \_ \_ I \_ \_ g.
30. O \_ \_ y m p \_ \_ a \_ \_

**VII. Mind map:**

**1 x 5 = 5**

31. Draw a mind map of any five tools and their uses.

**VIII. Draw the picture and colour it:**

**2 x 2½ = 5**

32. a) Tree
- b) Cup and saucer

**IX. 33. Draw a picture that shows nighttime and day time:**

**5**