

FORMATIVE ASSESSMENT - FIRST MID TERM

COMPUTER SCIENCE

Max. Marks: 25

Std - II

Time: 1 Hr

Name of the School:	Name of the Student:
Place:	Roll No.:

I. Choose the correct answer: 5 x 1 = 5

1. A computer has _____ parts.

a. 2 b. 3 c. 5
2. The _____ is the brain of the computer.

a. CU b. CPU c. MU
3. The _____ is present at the bottom of the desktop.

a. status bar b. scroll bar c. task bar
4. _____ units are the storage areas in a computer.

a. Output b. Input c. Memory
5. The opening screen is called the _____.

a. Laptop b. Palmtop c. Desktop

II. Expand the following: 4 x 1 = 4

6. CPU - _____
7. CU - _____
8. MU - _____
9. ALU - _____

III. 10. Draw a block diagram of a computer: 5 x 1 = 5

IV. Answer the following:

3 x 2 = 6

11. What are the parts of a CPU?


12. What are memory units?

13. What is a screen saver?

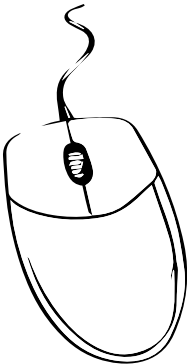
V. Picture reading:

5 x 1 = 5


14.




15.



16.



17.



18.

