

SUMMATIVE ASSESSMENT – FIRST TERM

ENVIRONMENTAL STUDIES

Max. Marks: 60

Std - II

Time: 2 Hrs

Name of the School: 	Name of the Student:
Place: 	Roll No.:

I. Choose the best answer: 5 x 1 = 5

- 1. Land with many trees, plants and animals _____.
a) mountains b) forest c) plains
- 2. The heart helps in _____ blood.
a) digestion b) pumping c) breathing
- 3. Plants give us fresh air to _____.
a) breathe b) medicines c) perfumes
- 4. Rabbits live in _____.
a) burrows b) pens c) dens
- 5. Birds _____ their eggs.
a) break b) incubate c) peck

II. Fill in the blanks: 5 x 1 = 5

- 6. Tableland is the other name for a _____.
- 7. The _____ is the biggest organ in our body.
- 9. _____ have weak stem and grow along the ground.
- 9. Animals kept at home are called _____.
- 10. A _____ is the home of a bird.

III. Match the following: 5 x 1 = 5

- A. 11. River - Deccan Plateau
- 12. India - Den
- 13. Flowers - Coop
- 14. Lion - Large water body
- 15. Hen - Brightly coloured

B. What do these birds eat? (Match):

5 x 1 = 5

- 16. Parrot - fish
- 17. Humming bird - fruits and nuts
- 18. Cranes - grains and seeds
- 19. Pigeons - smaller animals
- 20. Owls - nectar


IV. Missing letter:


5 x 1 = 5


- 21. L_____d.
- 22. H_____a_____.
- 23. W_____e_____t.
- 24. H_____r_____.
- 25. Cl_____b_____rs.


V. 26. Look at the picture. Write(H) for herbivore.(C) for carnivore and (O) for omnivore.


5 x 1 = 5











VI. True or False:

5 x 1 = 5

- 27. Muscles are the hardest parts of the body. _____
- 28. A goat is a wild animal. _____
- 29. Birds do not have teeth. _____

30. Vultures feed on the meat of dead animals. _____

31. Three to four glasses of water a day is enough for us. _____

VII. Rearrange the jumbled words:

5 x 1 = 5

32. dnpo - _____

33. niarb - _____

34. thligsnu - _____

35. erclmib - _____

36. slmamma - _____

VIII. Answer the following:

5 x 2 = 10

37. What is a plain?

38. Name the countries through which River Ganga flows.

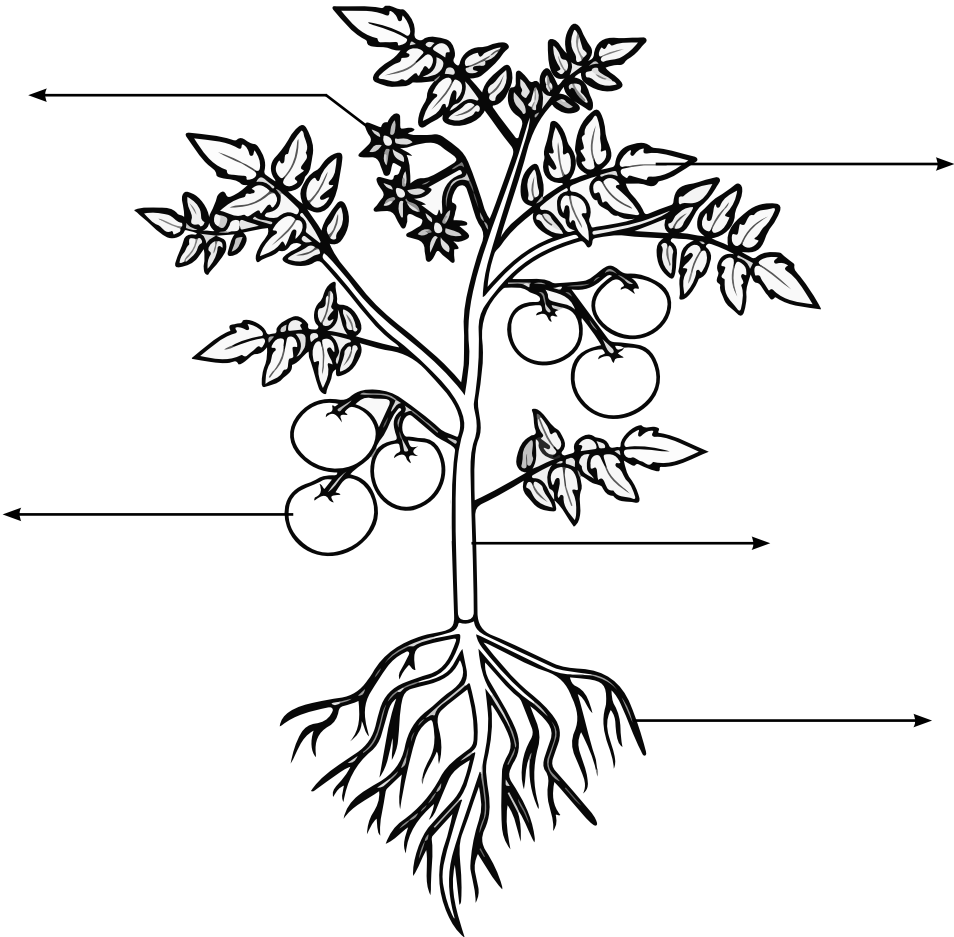
39. Name the different types of plants.

40. Write the difference between herbivores, carnivores and omnivores.

41. What helps a bird to fly?

IX. 42. Label the parts of the plant:

1 x 5 = 5



X. 43. Circle the birds that would fly:

5 x 1 = 5

