

SUMMATIVE ASSESSMENT – FIRST TERM**READY STEADY KNOW****Max. Marks: 50****Std - II****Time: 2 Hrs**

Name of the School: _____	Name of the Student: _____
Place: _____	Roll No.: _____

I. Match the following:**10 x 1 = 10**

- | | | |
|-----------------------|---|------------------------------------|
| 1. Jerdon's Courser | - | a. Life span of two years |
| 2. Flowers | - | b. Bara Singha |
| 3. Onion | - | c. Australia |
| 4. Great Barrier Reef | - | d. Bright colours |
| 5. Swamp Deer | - | e. Bird |
| 6. Swarm | - | f. Bushy plants smaller than trees |
| 7. WWF | - | g. Fruit |
| 8. Shrubs | - | h. World Heritage Site |
| 9. Iguazu Falls | - | i. World Wide Fund for Nature |
| 10. Tomato | - | j. Group of Honeybees |

II. Fill in the blanks:**5 x 1 = 5**



11. A large surface of land is known as _____.
12. Tuskers is another name for _____.
13. The trees which are cut illegally in the Deccan plateau is _____.
14. The month from April to May are known as _____ season.
15. The Amazon River is also home of a special meat-eating type of fish the _____.



III. Choose the best answer:**10 x 1 = 10**



16. Which of these birds live near Grand Canyon? _____
- a) Sparrow b) Parrot c) Golden Eagle d) Kiwi
17. Which of these is the home to the unique species called dugongs? _____
- a) The Great Barriers Reef b) Coral Island
- c) Plateau d) Indian Ocean

18. The pride of Australia is _____
- a) Canyon b) Great Barriers Reef c) Amazon d) Iguazu falls
19. _____ river runs through the Grand Canyon.
- a) Colorado river b) Amazon river c) Ganges river d) Mississippi river
20. Which of the following is very harmful for a healthy environment? _____
- a) Clean air b) Fresh water c) Fertile soil d) Plastic bags
21. Which of these stems do we eat? _____
- a) Cauliflower b) Artichoke c) Brinjal d) Papaya
22. Plants produce what for us to breathe? _____
- a) Carbon dioxide b) Water c) Oxygen d) Scent
23. A Weeping Willow is a _____
- a) Animal b) Bird c) Climber d) Tree
24. Eagle is a _____ bird?
- a) Herbivore b) Timid c) Carnivore d) Omnivore
25. The highest point of the Iguazu falls is known as _____
- a) Mt Everest b) Devils Throat c) Kanchenjunga d) K2

IV. Identify the following pictures and write their name:
10 x ½ = 15

<div>26.</div>  <div>_____</div>	<div>27.</div>  <div>_____</div>
---	--

<div>28.</div>  <div>_____</div>	<div>29.</div>  <div>_____</div>
---	--

<p>30.</p>  <hr/>	<p>31.</p>  <hr/>
<p>32.</p>  <hr/>	<p>33.</p>  <hr/>
<p>34.</p>  <hr/>	<p>35.</p>  <hr/>

V. Write one line on the given topic:

2 x 5 = 10

36. Amazon river.

37. Write about the 3Rs.
