

QUARTERLY EXAMINATION - 2024 - 25

MATHS
(RAINBOW)

Max. Marks: 100

Std - LKG

Time: 2 Hrs



Name of the Student: <hr/>	Written	Oral	Total
Name of the School: <hr/>			

I. Tick (✓) the correct answer: 5 x 2 = 10

1. Big bird



2. Small fruit




3. Tall candle



4. Short man




5. Short hair




II. Write numbers from 1 to 10:

$10 \times 2 = 20$





III. Count and circle the correct numbers:

$5 \times 2 = 10$




1.

1	3	5
---	---	---




2.

3	8	5
---	---	---




3.

2	3	4
---	---	---



4.

7	9	5
---	---	---



5.


4	3	2
---	---	---

IV. Match the following:

5 x 2 = 10




2




4



1



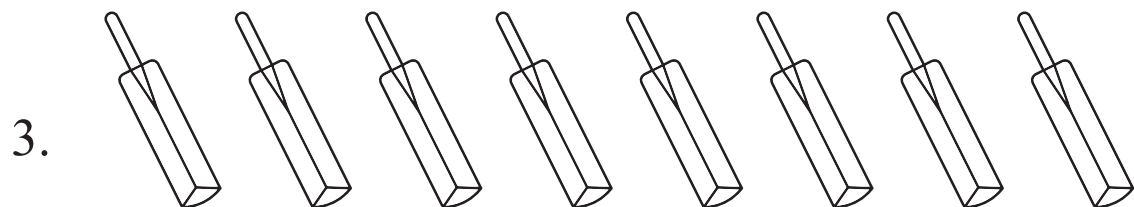
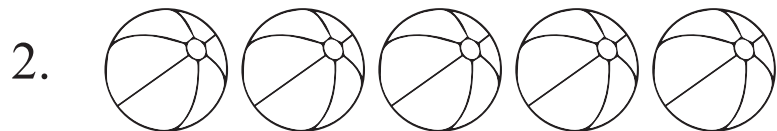
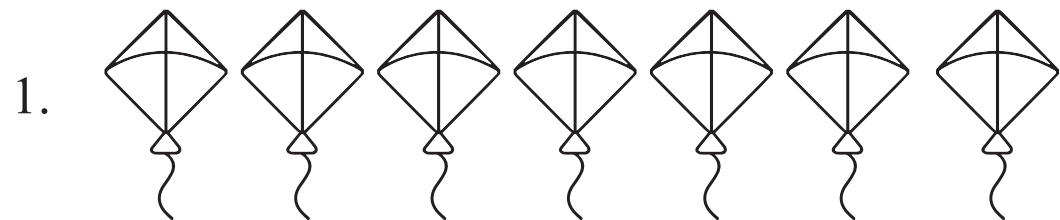
3

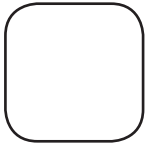

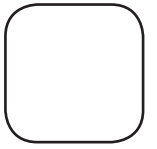



5

V. Count and write the number in the box:

5 x 2 = 10





VI. Oral:

40

- | | |
|----------------------------------------|------|
| 1. Tell the numbers from 1 to 20. | (15) |
| 2. Count the object & tell the number. | (15) |
| 3. Tell big, small & tall, short. | (10) |