

**SUMMATIVE ASSESSMENT – FIRST TERM**

**MATHEMATICS**

**Max. Marks: 60**

**Std - II**

**Time: 2 Hrs**

<b>Name of the School:</b> <hr/>	<b>Name of the Student:</b> <hr/>
<b>Place:</b> <hr/>	<b>Roll No.:</b> <hr/>

**I. Fill in the blanks:**

**5 x 1 = 5**

1. A triangle has \_\_\_\_\_ sides.
2. A rectangular box is a \_\_\_\_\_ shape.
3.  $5 - 0 =$  \_\_\_\_\_.
4. There are \_\_\_\_\_ months in a year.
5. The successor of 19 is \_\_\_\_\_.

**II. State whether True or False:**

**5 x 1 = 5**

6. A square box is a cuboid in shape. \_\_\_\_\_.
7. I am 99; I have 3 tens and 9 ones. \_\_\_\_\_
8. 10 is in between 9 and 11. \_\_\_\_\_
9. A circle has no sides. \_\_\_\_\_
10. December is the last month of the year. \_\_\_\_\_

**III. Match the names with their shapes:**

**5 x 1 = 5**

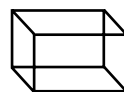
11. Cube




12. Sphere




13. Cylinder



14. Cone



15. Cuboid



**IV. Write in ascending / descending order:****5 x 2 = 10**

16. Write the numbers from 18 to 28 in ascending order.

---

17. Write the numbers from 26 to 20 in descending order.

---

18. Write the numbers from 49 to 59 in ascending order.

---

19. Write the numbers from 99 to 80 in descending order.

---

20. Write the numbers from 66 to 58 in descending order.

---

**V. 21. Write the predecessor and successor of the following numbers:****5 x 1 = 5**

- a.  78       c.  44       e.  90
- b.  67       d.  55

**VI. Addition / Subtraction:****5 x 2 = 10**

22. $\begin{array}{r} 22 \\ + 77 \\ \hline \end{array}$	24. $\begin{array}{r} 72 \\ + 26 \\ \hline \end{array}$	26. $\begin{array}{r} 21 \\ + 78 \\ \hline \end{array}$
---	---	---

23. $\begin{array}{r} 36 \\ - 12 \\ \hline \end{array}$	25. $\begin{array}{r} 87 \\ - 56 \\ \hline \end{array}$
---	---

**VII. Word Problems:****5 x 2 = 10**

27. There are 22 girls and 30 boys in a class. What is the total strength of the class?

---

28. In a factory, there are 67 women and 22 men. How many workers are there in the factory?

---

29. In a test, you got 12 marks out of 15. How many marks did you lose?

---

30. There are 63 birds sitting on a tree. 10 birds flew away. How many birds are left on the tree?


---

31. Deepa has 38 hens. She gives 11 hens to her sister. How many hens does she have now?

---


**VIII. 32. For the below given objects, tick the appropriate unit to measure their length? 5 x 1 = 5**

Cloth




a)  cm     m

desk



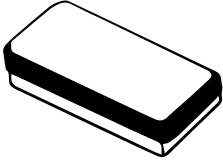
b)  cm     m

boy



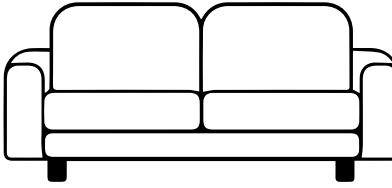
c)  cm     m

pencil box



d)  cm     m




sofa






d)  cm     m





**IX. Observe and complete the patterns:**

**5 x 1 = 5**

33.    \_\_\_\_\_

34.    \_\_\_\_\_

35.    \_\_\_\_\_

36.     \_\_\_\_\_

37. 

+	-	÷	×
---	---	---	---

+	-	□	×
---	---	---	---

+	□	÷	×
---	---	---	---