

SECOND MID-TERM EXAMINATION - 2023

MATHS
(RAINBOW)

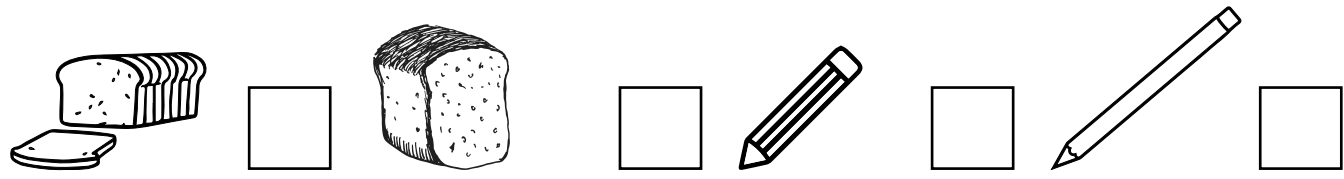
Max. Marks: 50

Std - UKG

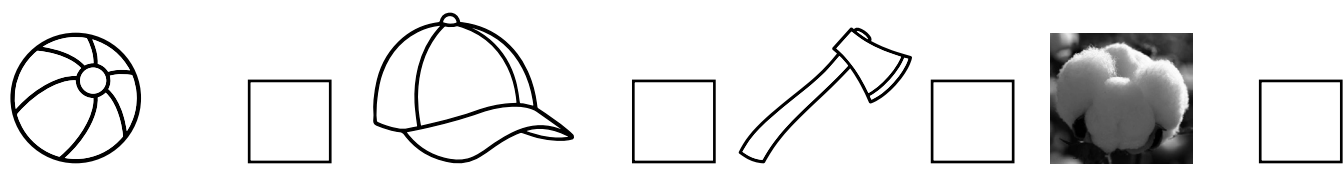
Time: 2 Hr

Name of the Student:	Written	Oral	Total
Name of the School:			


I. a) Tick (✓) the thick object: 5 x 1 = 5



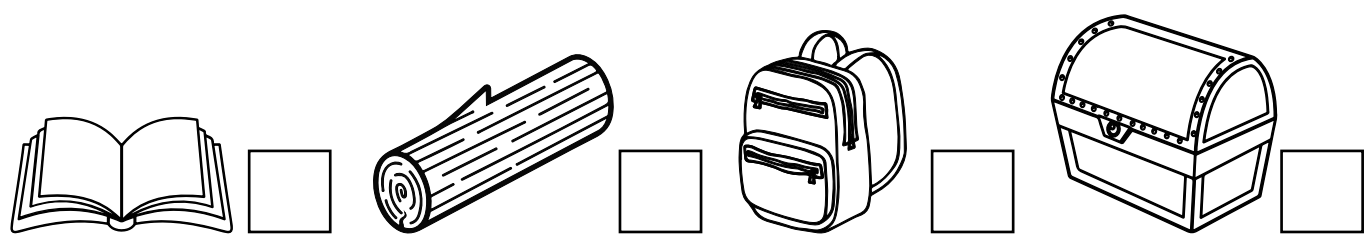
b) Tick (✓) the hard object:




c) Cross (✕) the light object:



d) Cross (✕) the heavy object:



e) Tick (✓) empty ones:



II. a) Write the numbers 1 to 10 in the ascending order: $2 \times 2\frac{1}{2} = 5$

--	--	--	--	--	--	--	--	--	--

b) Write the numbers 1 to 10 in the descending order:

--	--	--	--	--	--	--	--	--	--

III. Write the numbers 51 to 100: **10**

IV. a) Write the number names in the blanks: **$5 \times 1 = 5$**

1. 21 _____
2. 32 _____
3. 43 _____
4. 25 _____
5. 50 _____

b) Write the numbers in the blanks: **$5 \times 1 = 5$**

1. twenty two _____
2. thirty five _____
3. forty nine _____
4. seventeen _____
5. eight _____

V. Oral: **$2 \times 10 = 20$**

1. Tell the numbers 51 to 100
2. Before, after & between.