

HALF YEARLY EXAMINATION - 2023

MATHS  
(RAINBOW)

Max. Marks: 100


Std - UKG


Time: 2 Hrs


Name of the Student:	Written	Oral	Total
Name of the School:			


I. Write the numbers 50 to 100: 10



II. a) Number the pictures in ascending order: 5





















b) Number the pictures in descending order:



III. a) Counting forward:

5

186125

19417153

b) Counting backward:

1106190

2091182

IV. Write the numbers that comes before, between, and after:10

Nuner comes before			Number comes between			Number comes after		
	6	7	81		83	59	60	
	26	27	66		68	88	89	
	55	56	12		14	23	24	
	48	49	35		37	16	17	
	81	82	57		59	50	51	

V. a) Count by two. Write the missing numbers:5

1		3		5		7		9	
---	--	---	--	---	--	---	--	---	--

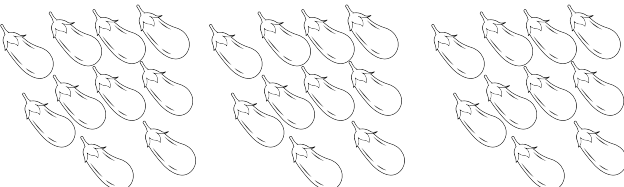
b) Count by five. Write the missing numbers:

5		15		25		35		45	
---	--	----	--	----	--	----	--	----	--


VI. Write the tens, then write the numbers:5

1.

\_\_\_\_\_ tens =

2.

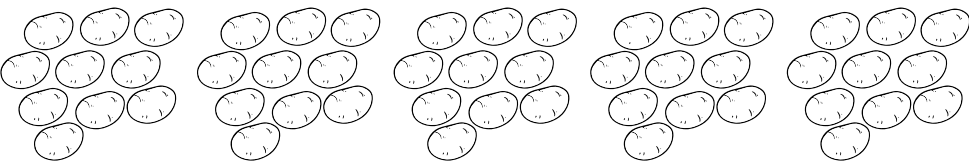
\_\_\_\_\_ tens =

3.

\_\_\_\_\_ tens =

4.

\_\_\_\_\_ tens =

5.

\_\_\_\_\_ tens =

VII. Ring the numbers for numbers name:5

sixty three
52    63    42

fifty five
65    75    55

twelve
11    13    12

sixty
40    50    60

thirty eight
38    48    58


VIII. Ring the correct number:

5

eighty	fifty eight	forty four
80    60    40	48    58    68	44    34    54
thirty two	seven	
12    22    32	7    17    27	

IX. Fill in the position of the birds in the queue:

5



1. \_\_\_\_\_ is the crow.
2. \_\_\_\_\_ is the dove.
3. \_\_\_\_\_ is the duck.
4. \_\_\_\_\_ is the hen.
5. \_\_\_\_\_ is the ostrich.

X. Match the numbers to their names:

5

40	twenty
50	ten
30	fifty
10	fourty
20	thirty

XI. Oral:

40

1. Tell the time.
2. Numbers name 1 to 50.
3. Tell the thick, thin, hard, soft, light, lighter, heavy, heavier.