

FORMATIVE ASSESSMENT – THIRD MID TERM

COMPUTER SCIENCE

Max. Marks: 25

Std - II

Time: 1½ Hrs

Name of the School: 	Name of the Student:
Place: 	Roll No.:

I. Choose the best answer: 5 × 1 = 5

1. The _____ tool is used to select an irregular part of an image.

a. select b. free form select c. circle
2. The Airbrush tool is used for _____ painting

a. thick b. thin c. spray
3. _____ is used to create drawings on a drawing area

a. paint b. calculator c. wordpad
4. To choose a colour from the working area, the _____ tool is used instead of the colour palette.

a. pick colour b. brush c. line
5. The _____ tool is used to draw thick lines and paint free hand.

a. air brush b. brush c. line

II. Fill in the blanks: 5 × 1 = 5

6. Google Chrome is a _____.
7. _____ is a network of computers
8. _____ is a search engine
9. _____ is used to access the internet
10. _____ is an operating system

III. Match the following:

$4 \times 1 = 4$

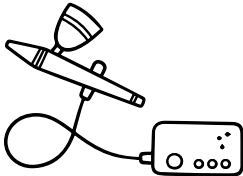
11. Text tool

-




12. Pick colour tool

-




13. Brush tool

-



14. Air brush tool

-



IV. Write missing letters:

$5 \times 1 = 5$

15. B__SH

17. __UT__ON

19. T__C__

16. T__T

18. MO__E

V. Answer the following:

$3 \times 2 = 6$

20. How will you save your work?

21. Explain the following terms:

- a. Internet b. Website

22. Write the name of your school website.