

THIRD MID TERM EXAMINATION

MATHS
(RAINBOW)

Max. Marks: 50

Std - LKG

Time: 2 Hrs


Name of the Student:	Written	Oral	Total
Name of the School:			

I. Write the numbers from 21 to 50: 10


21									
31									
41									

II. Count & write the numbers: 5 x 2 = 10


1.




2.




3.



4.



5.



III. Write the numbers that comes next:

$$5 \times 2 = 10$$

a. 4 _____

b. 6 _____

c. 16 _____

d. 2 _____

e. 11 _____

IV. Oral:

$$2 \times 10 = 20$$

1. Tell the number from 1 to 50
2. Tell the number name (One to Five)