

SUMMATIVE ASSESSMENT - THIRD TERM

LIGHT OF KNOWLEDGE

Max. Marks: 50


Std - II


Time: 2 Hrs


Name of the School:	Name of the Student:
Place:	Roll No.:


I. Fill in the blanks:


1. This vegetables when you cut makes you eyes water _____


2. This vegetable which is rich in _____ is good for your eyes and the horses and rabbits love them.


3. This a root and is loved by all children when made into chips. It is rich in _____


4. This vegetables which is very sour is very good for diabetic patients. _____


5. This vegetable which looks like our finger, is very good for your of memory power. _____



5 x 1 = 5

II. Name the following:

1. Name two important internal organs. _____,

2. Name the bird that layS the largest egg. _____

3. Name two Instruments with black and white chords. _____

4. Name the smallest continent. _____

5. Name the any two planet in our solar system. _____

5 x 1 = 5

III. Who am I?

5 x 1 = 5

1. I am used to change the channels on T.V who am I _____.

2. I am a future robotic cat who has come to help a little boy. Who am I _____.

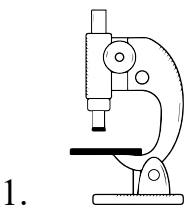
3. I help the students to know more about numbers – who am I _____.

4. I help you to know more about the mother tongue - _____.

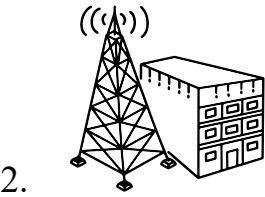
5. I help the students to draw well who am I _____.

IV. Look at the picture. Give the connect answer for the following:

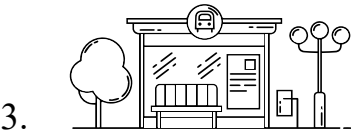
5 x 1 = 5



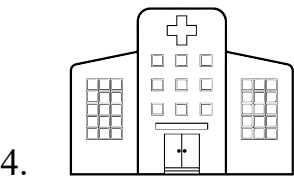
The _____ to test our blood and urine.



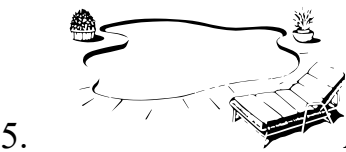
A _____ to take part in audio telecast.



A _____ to board a bus.





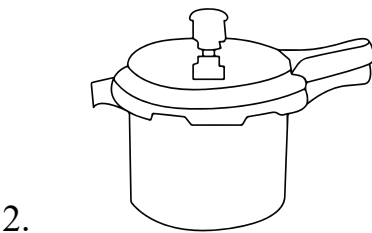

A _____ to get treated when we are sick.



A _____ to learn and practice swimming.

V. Here is a list of things. Write in the box below the picture, the name of the product and the materials used to make them:

5 x 1 = 5




VI. Look at the pictures of some sports write the name of the place where it is played:5 x 1 = 5

1.



2.




3.



4.




5.




VII. The inventions and the inventors names are given. Write 2 popular brand name for these inventions: 5 x 1 = 5

1.




Aeroplane - Wright Brothers	
1.	
2.	

2.




Washing Machine - James King	
1.	
2.	

3.



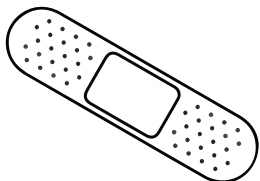
Car - Karl Benz	
1.	
2.	

4.



Television - John Logie Baird	
1.	
2.	

5.



Band aid - Earl Dickson	
1.	
2.	

VIII. Match the following:

5 x 1 = 5

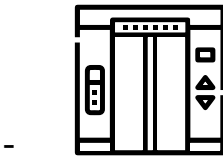
1. Thomas Alva Edison



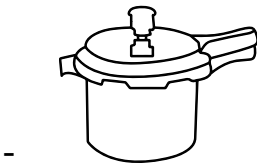
2. Elisha otis




3. Denis Papin



4. John lee love




5. Colin Murdoch



IX. Name these famous actors and actresses of tamil cinema:

5 x 1 = 5

1.



2.



3.



4.



5.



X. Write True [T] (or) False [F]:

5 x 1 = 5

- 1. Plant grow from roots _____.
- 2. All leaves are green in colour _____.
- 3. All plants bear fruits _____.
- 4. Water plants are known as aquatic plants _____.
- 5. The flower grown into seed _____.