

SUMMATIVE ASSESSMENT - THIRD TERM

LIGHT OF KNOWLEDGE

Max. Marks: 50

Std - III

Time: 2 Hrs

Name of the School: <hr/>	Name of the Student: <hr/>
Place: <hr/>	Roll No.: <hr/>

I. Choose the correct answers:

10 × 1 = 10

1. The shore of on ocean is known as the _____.
 a. coast b. tropic of cancer c. land
2. The place where wrestling takes place is
 a. field b. arena c. court
3. The person who makes use of a camera for his profession _____.
 a. biologist b. geologist c. photographer
4. The sound of Emu is _____.
 a. drum b. click c. whistle
5. The First President of Independence India (1950) _____.
 a. Jawaharlal Nehru b. Dr. Rajendra Prasad c. C.Rajagopalachari
6. Capital of China is _____.
 a. Beijing b. Kathmandu c. Thimpu
7. Land of thousand lakes is _____.
 a. Tibet b. Finland c. Australia
8. The station you will contact when there has been a robbery _____.
 a. hospital b. police station c. fire station
9. The name of the house of a squirrel _____.
 a. shin b. drey c. school
10. Goitre affects _____.
 a. thyroid gland b. salivary gland c. lung

II. Fill in the blanks:

10 × 1 = 10

1. The normal body temperature is _____.
2. With the use of a computer, you write letters to other through _____.
3. Soldiers stay in _____.
4. A _____ of coffee.
5. The land of the rising sun _____.
6. The vehicle which carries a sick person _____.

7. The old name of Mumbai is _____.
8. The person who travels in the rocket is an _____.
9. Capital of India is _____.
10. _____ takes care of the passengers in a plane.

III. Match the following:

$5 \times 1 = 5$

- | | |
|----------------------------|-----------------------------|
| 1. Lizard | - Salivary gland |
| 2. Mumps | - Monastery |
| 3. Indian Governor General | - Australia |
| 4. Land of Kangaroos | - Cuts off tail and escapes |
| 5. Monk | - Lord Mount Batten |






IV. Missing letters:

$5 \times 1 = 5$

- | | | |
|----------------|------------|---------------|
| 1. ____N____IA | 3. IR ____ | 5. E ____ OPE |
| 2. N____E | 4. J ____A | |






V. Look at the picture and identify the singers given here:

$5 \times 1 = 5$

- | | | | | |
|--|--|--|--|--|
| 1.  | 2.  | 3.  | 4.  | 5.  |
|--|--|--|--|--|

VI. Write down the cooking terms for the following pictures:

$5 \times 1 = 5$

- | | | |
|--|---|--|
| 1.  | 2.  | 3.  |
| 4.  | 5.  | |

VII. Who am I?

$5 \times 1 = 5$

1. I am a person who collects photographs. _____
2. I am a person who collect sea shell. _____
3. I am a person. Who collect flags. _____
4. I am a person. Who collect books. _____
5. I am a person. Who collect coins. _____

VIII. Name the capital of the given countries:

$1 \times 5 = 5$

- | | | |
|-------------|-------------|---------------|
| 1. Nepal | 2. Bhutan | 3. Bangladesh |
| 4. Malaysia | 5. Srilanka | |