

SUMMATIVE ASSESSMENT - THIRD TERM

LIGHT OF KNOWLEDGE

Max. Marks: 50

Std - IV

Time: 2 Hrs

Name of the School:	Name of the Student:
Place:	Roll No.:

I. Choose the best answer:

10 x 1 = 10

1. The king who received an arrow in his eye at the Battle of Hastings._____
- a) King Harold II b) King Richard I c) King of France
2. Computer microchip is made up of _____
- a) Silicon b) Copper c) Brace
3. A substance which produces a lot of heat on burning is called _____
- a) Oxidizing agent b) Fuel c) Biomass
4. The least amount of fuel in the world is _____
- a) Oil b) Coal c) Uranium
5. The fear of school is _____
- a) Scolionophobia b) Tomophobia c) Scelerophobia
6. The red coin in carom is known as the _____
- a) Rook b) King c) Queen
7. Harmful radiation emitted by the sun is _____
- a) Radio wave b) Ultra – violet c) Infra – red
8. _____ leads a gang of outlaws in Sherwood Forest.
- a) King Lear b) Robin Hood c) Charles II
9. _____ is the name of Harry Potter’s pet owl.
- a) Dobby b) Fluffy c) Hedwig
10. The code for entering into your computer is known as _____
- a) Software b) Application c) Password

II. Determine if the following sentences are True or False:

10 x 1 = 10

1. Leaf is where the plant manufactures food
2. There are no rivers in Saudi Arabia country.

3. Ours sense of smell helps us to recognize the tastes.
4. Flowers are the part of plant that attracts insects.
5. Plant prevents soil erosion.
6. The title Pharaohs was given to the rulers of Ancient Egypt.
7. There are three types of germination.
8. The notable event which affected London in September 1666 is “The Great Flood of London”
9. Aloe Vera is also known as a miracles plant.
10. Folders are also known as directory.

III. Match the Following:

5 x 1 = 5

- | | |
|---------------------|--------------------------|
| 1. Practice makes | - seldom knocks twice |
| 2. A good beginning | - keeps the doctor away. |
| 3. First come | - makes a good end. |
| 4. An apple a day | - a man perfect. |
| 5. Opportunity | - first serve |

IV. Shade the names of the raw materials in the grid, for the products given: 12 x ½ = 6

1. Blankets 2. Sweater 3. Candle 4. Ice Cream 5. Vaseline 6. Chair
7. Bags 8. Books 9. Paper 10. Pot 11. Coir Rope 12. Khadhi Dress

B	Y	C	A	F	P	Z	K	G	Z	I	V	B	Q
Z	D	O	O	W	D	K	C	Q	B	V	Y	F	Z
H	R	C	Z	B	V	W	O	O	D	P	U	L	P
P	L	O	O	W	A	H	T	Z	Y	B	S	M	E
I	Q	N	Q	A	Z	F	T	Y	H	P	B	D	T
V	B	U	Y	X	P	W	O	O	L	A	Q	Z	R
Y	A	T	B	P	V	M	N	S	E	X	F	P	O
S	P	F	H	Z	J	Y	X	Q	A	D	P	N	L
K	L	I	M	A	Q	Z	P	B	T	F	Z	V	E
V	Z	B	P	F	B	D	Z	A	H	Y	Q	Y	U
Q	H	R	E	P	A	P	B	P	E	Z	D	U	M
F	S	E	Z	D	J	Y	P	G	R	Q	K	H	B

V. Find out the appropriate sentences and place them in correct place:

10 x ½ = 5

- | | Butterfly | Moth |
|-----------------------------|-----------|-------|
| 1. Brightly coloured. | _____ | _____ |
| 2. Rests with wings opened. | _____ | _____ |

- | | | |
|-----------------------------------|-------|-------|
| 3. Uses scent to select mates. | _____ | _____ |
| 4. Slender hairless bodies. | _____ | _____ |
| 5. Night flying insect. | _____ | _____ |
| 6. Rest with wings closed | _____ | _____ |
| 7. Fat having bodies. | _____ | _____ |
| 8. Club is missing in the antenna | _____ | _____ |
| 9. Have ears to detect sound. | _____ | _____ |
| 10. Obtain nectar | _____ | _____ |

VI. Fill in the blanks:

5 x 1 = 5

- The amount of oil that may become available for use is called as _____
- The spit fires and hurricanes helped win the Battle _____ in 1940.
- A file saved in Paint is saved as _____ files.
- The small pictures on the desktop screen is known as _____
- _____ was created by Gepetto, the wood carver.





VII. Find out the missing letters:

5 x 1 = 5

- | | | |
|--------------------|----------------|---------------------|
| 1. Al _____ ross | 2. _____ her | 3. Hippo _____ amus |
| 4. Grass _____ per | 5. _____ ster. | |

VIII. Identify the following pictures and name them:

4 x 1 = 4

- | | |
|--|---|
| 1.  | 2.  |
| 3.  | 4.  |