

ANNUAL EXAMINATION - 2023 - 24

MATHS
(RAINBOW)

Max. Marks: 100

Std - LKG

Time: 2 Hrs

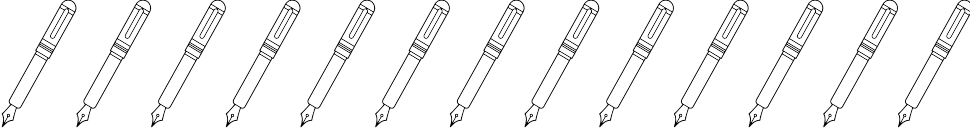
Name of the Student:	Written	Oral	Total
Name of the School:			

I. Write the numbers from 51 to 100: 10


51									
61									
71									
81									
91									

II. Count & write the numbers: 5 x 2 = 10


a.




b.





c.



d.



e.



III. Write the number that comes next:

$5 \times 1 = 5$

11 _____ 15 _____ 3 _____

19 _____ 7 _____

IV. Write the number that comes in between:

$5 \times 1 = 5$

23		25
----	--	----

35		37
----	--	----

17		19
----	--	----

5		7
---	--	---

42		44
----	--	----

V. Count by 10: Write the missing numbers:

$8 \times 2 = 16$

10									100
----	--	--	--	--	--	--	--	--	-----

VI. Fill in the numbers of tens & ones. Write the numbers in the box:

$5 \times 2 = 10$

_____ tens _____ ones

_____ tens _____ ones

_____ tens _____ ones

_____ tens _____ ones

_____ tens _____ ones

VII.How many of each:

4 x 1 = 4



VIII. Oral:

1. Tell the shapes name.

10
2. Tell the Number name (One to Ten)

20
3. Tell the after, before numbers.

10