

SUMMATIVE ASSESSMENT – FIRST TERM

LIGHT OF KNOWLEDGE

Max. Marks: 50

Std - I

Time: 2 Hrs

Name of the School:	Name of the Student:
Place:	Roll No.:

I. Tick the good habits from the following pictures: 5 x 1 = 5

1. 

☐

2. 

☐

3. 

☐

4. 

☐

5. 

☐

6. 

☐

7. 

☐

8. 

☐

9. 

☐

10. 

☐

II. Name the rooms by looking at the following pictures: 3 x 1 = 3

5. 

6. 

7. 

III. Alphabet Game: (Find out the alphabet and the word that sounds the same) 5 x 1 = 5

- 1. I am between S and U. I am a drink. _____
- 2. I am the second alphabet. I am an insect who stings. _____
- 3. I come after X. I am used for asking questions. _____
- 4. I come after U. I am the plural of I. _____
- 5. I come after N. I am a word of surprise. _____

IV. Name the birds by looking at the pictures: 3 x 1 = 3

1.



2.




3.




V. Match the pictures of the land forms with their names: 5 x 1 = 5

1.




Island

2.




Glacier

3.




Desert

4.



Forest

5.



Volcano

VI. Fill in the blanks using help box:

5 x 1 = 5

(Eight, 365, blue whale, smell and see, New Delhi)

1. The biggest animal in the world is _____
2. My nose helps me to _____ and my eyes to _____
3. There are _____ in the universe.
4. The capital of our country is _____
5. One year has _____ days.

VII. "Lets play" name them by looking at their pictures:

3 x 1 = 3



VIII. Choose the best answer:

5 x 1 = 5

1. _____ is supposed to be the queen of the flowers.
a) Rose b) Sunflower c) Daisy
2. The flower which always faces the sun is _____
a) Rose b) Sunflower c) Daisy
3. Name the type of plant which needs support _____
a) Shurb b) Tree c) Climber
4. Name the type of plant which is weak stemmed and which creeps on the ground

a) Creeper b) Climber c) Shurb
5. The person who looks after the plants in the garden is the _____
a) Gardener b) Baker c) Worker

IX.. Find out the tools:

4 x 1 = 4


(Tape, Spade, Screw driver, Knief)

1. We cut the fruits with the _____
2. We measure the length of the things with the _____
3. We screw the nails with the _____
4. We dig the soil with the _____


X. Match the following:

5 x 1 = 5


1.




Neigh, Neigh
2.




Moo, Moo
3.



Oink, Oink
4.



Cluck, Cluck
5.




Bark, Bark


XI. Write the name of the seasons for the following pictures:

3 x 1 = 3


1.



2.



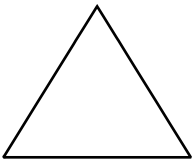
3.




XII. Name the shapes:

4 x 1 = 4


1.



2.



3.



4.

