

SUMMATIVE ASSESSMENT – FIRST TERM**ENVIRONMENTAL STUDIES****Max. Marks: 60****Std - II****Time: 2 Hrs**

Name of the School: _____	Name of the Student: _____
Place: _____	Roll No.: _____

I. Choose the correct answer:**5 x 1 = 5**

- Table land is the other name for a _____
a) Plateau b) hill c) forest
- _____ is the biggest organ in our body.
a) skin b) lungs c) liver
- The thick main stem of a tree is called the _____
a) trunk b) root c) leaf
- Animals that give birth to young ones are called _____
a) mammals b) egg-laying animals c) hatching
- The body of a bird is covered with _____
a) hair b) feathers c) wings

II. Fill in the blanks:**5 x 1 = 5**

- The nest of a _____ bird has an opening at the bottom.
- Animals kept at home are called _____ animals.
- A plant needs soil _____, _____ and _____ to grow well.
- The soft parts under the skin are our _____
- Very high hills are called as _____

III. Write true or false:**5 x 1 = 5**

- Our stomach and kidneys are in the abdomen. _____
- Birds do not have teeth. _____
- We get honey from sheep. _____

4. We must eat healthy food and do exercise to keep our body fit and healthy.

5. The ostrich can fly. _____




IV. Match the following:

5 x 1 = 5

- 1. herbs - den
- 2. lion - large water body
- 3. very high hills - brightly coloured
- 4. flowers - weak stem and need support to grow
- 5. lake - mountain

V. Picture reading. Name the water bodies and land bodies:

5 x 1 = 5



VI. Fill in the missing letters:

3 x 1 = 3

1. S _____ d

3. _____ t _____ m

2. C _____ im _____ r








VII. Choose the correct option given in the brackets:

3 x 1 = 3

1. We get honey from _____ (birds / bees)
2. We get milk from _____ (cow / cat)
3. We get eggs from _____ (rabbit / hen)

VIII. Circle the birds that cannot fly.

5 x 1 = 5



IX. Answer the following questions:

5 x 2 = 10

1. Which landform is covered with sand?

2. Name any two internal organs and two external organs and list their function.

3. Why are roots important for a plant?

4. Describe the weaver bird's nest.

5. Write two ways in which we can take care of our body.

X. Write the names of animals. Pick up the correct answer:

5 x 1 = 5

1. _____ live in stables. (Cows / Horses)
2. _____ live in a coop. (Hens / Sheep)
3. _____ live in shed. (Cows / Dogs)
4. _____ live in trees. (Monkeys / Rabbits)
5. _____ live in beehives. (Bees / Ants)

XI. Draw the diagram of any two Internal Organs:

5

XII. Who am I?

4 x 1 = 4

1. You cannot see me outside. I am underground. I fix the plant to the ground

2. I support the plant. I am dark green or brown in colour _____
3. I am green in colour. I grow from the stem _____
4. I come from flowers. I have seeds inside me _____